

Name: \_\_\_\_\_

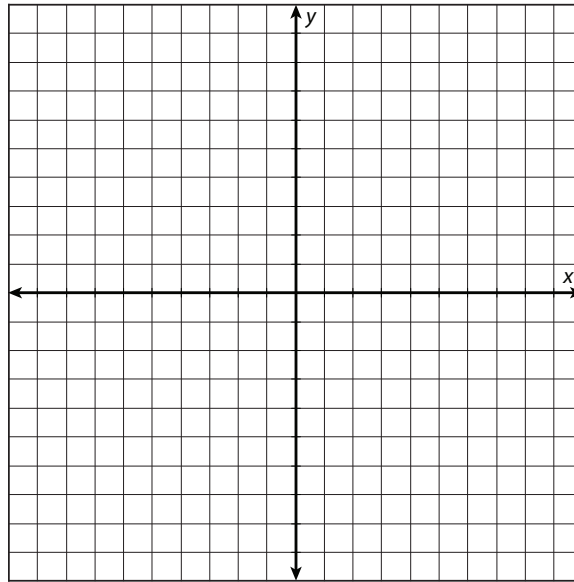
Date: \_\_\_\_\_

### Practice: Graphing Logarithmic Functions

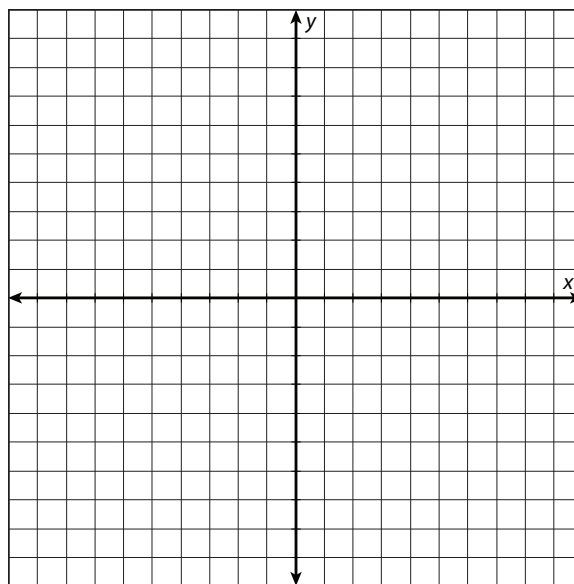
A

For problems 1–4, sketch  $f(x)$  and  $g(x)$ . Then, calculate the solution to the system of the two functions.

1.  $f(x) = 1 + 2 \log_3 x$   
 $g(x) = 2 - \log_3 x$



2.  $f(x) = \log(x + 1)$   
 $g(x) = \log(2 - x)$

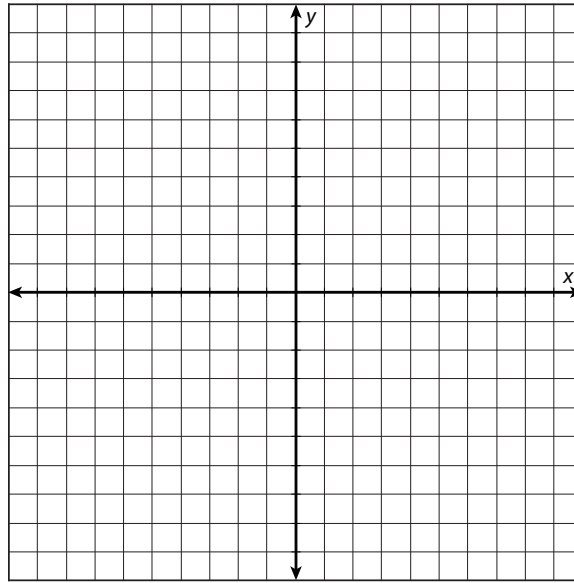


*continued*

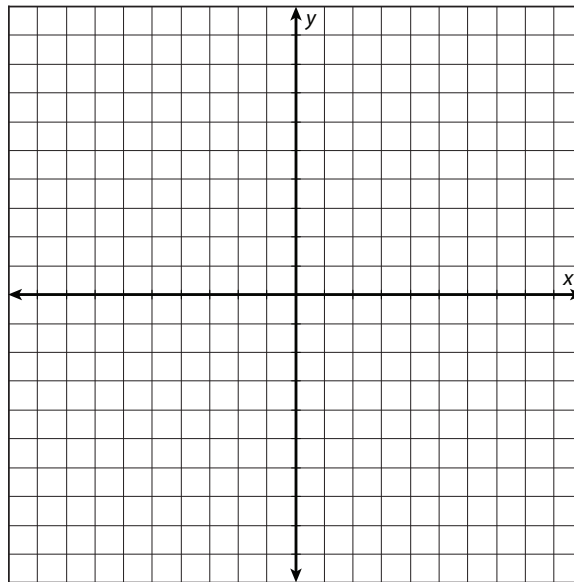
Name: \_\_\_\_\_

Date: \_\_\_\_\_

3.  $f(x) = 3 \cdot \ln(x + 1)$   
 $g(x) = 2 \cdot \ln(x - 1)$



4.  $f(x) = \log_4 x^2$   
 $g(x) = \log_4(3x + 4)$



*continued*

Name: \_\_\_\_\_

Date: \_\_\_\_\_

For problems 5–7, compare the domains and ranges of the three functions in each problem. Then, state the domain(s) over which all three functions are defined.

5.  $f(x) = 1 - \ln x$   
 $g(x) = 1 - 2 \cdot \ln x$   
 $h(x) = 2 - \ln x$

6.  $f(x) = 2 \cdot \log(x - 1)$   
 $g(x) = \log(x - 2)$   
 $h(x) = \log(x + 1)$

7.  $f(x) = 1 + 2 \cdot \log_3(x + 4)$   
 $g(x) = 2 + 4 \cdot \log_3(x + 1)$   
 $h(x) = 4 + \log_3(x + 2)$


**continued**

Name: \_\_\_\_\_


Date: \_\_\_\_\_

For problems 8–10, use the information in each problem to sketch a graph of the given function on a coordinate plane. Be sure to label the axes so that all the real-world parts of the domain and range are evident. Then, use your graph to solve the problem.

8. The longevity of soy-based ink-jet cartridges at a public transportation ticket kiosk varies according to the logarithmic function  $N(t) = 19 - 6 \cdot \ln t$ , where  $t$  is the time in weeks and  $N(t)$  is the number of cartridges used up during the time  $t$ . If the domain of the function is  $[2, 20]$ , what is the range of the function? What kind of number is  $N(t)$ —a fraction, an integer, negative, positive?



9. The number of mechanical failures of a NASCAR stock car over the first 40 minutes of a race is modeled by the logarithmic function  $F(t) = -1.5 + 0.9 \cdot \ln t$ , where  $t$  is time in minutes. What is the minimum time elapsed after which a failure is predicted to occur according to this model?



**continued**

Name: \_\_\_\_\_

Date: \_\_\_\_\_

10. In a youth hockey league, the team score keeper found that the time  $T(s)$  it takes a tied game to end with a winning score within 17 minutes of the overtime period is modeled by the function  $T(s) = 17 - 11 \cdot \ln s$ , in which  $s$  is the number of shots on goal taken by the winning team. What are the domain and range of the function?

